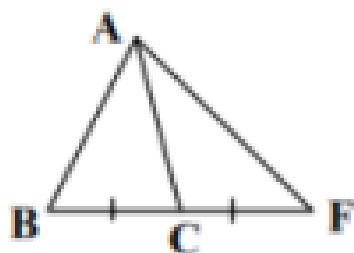


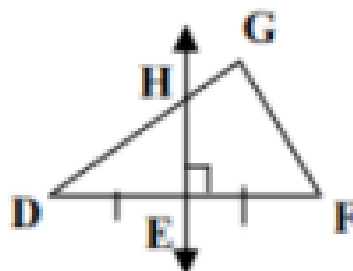
Geometry #5: Special Segments in Triangles
Do Now

Name the special segment for #1-4

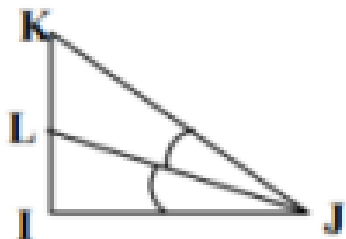
1) \overline{AC}



2) \overline{HE}



3) \overline{LJ}



4) \overline{PN}

